

Theory Quiz

Keyboard Level 5

Key Signatures

Identify each key signature below. All key signatures are major.



Order of Accidentals

Write the order of sharps on the lines below:

Write the order of flats on these lines:

Intervals

Identify each interval. Your answer should have two parts—a number giving the distance (ex. Write "3" for a 3rd), and either "M" for Major or "P" for perfect. One example is given for you.



M2



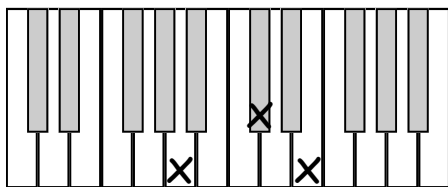
Rhythms

Write in counting below each line.

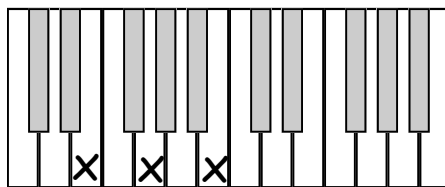


Triads

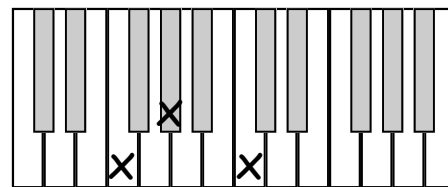
Circle the quality of triad below each picture.



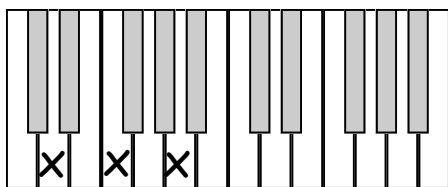
Major Minor



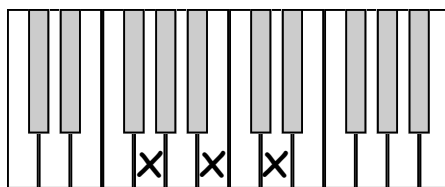
Major Minor



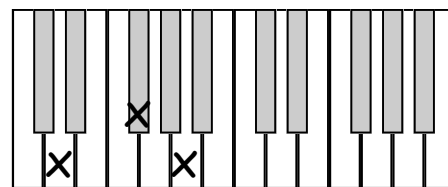
Major Minor



Major Minor



Major Minor



Major Minor

Draw each triad on the staff, using accidentals if necessary. (Do not add a key signature).




F Major




D minor




B Major



C minor



A Major



E minor

Scales

Add accidentals to the following scales to create the qualities (i.e. major, minor) given. (Do not add a key signature.)

A Major



e natural minor



d harmonic minor

